

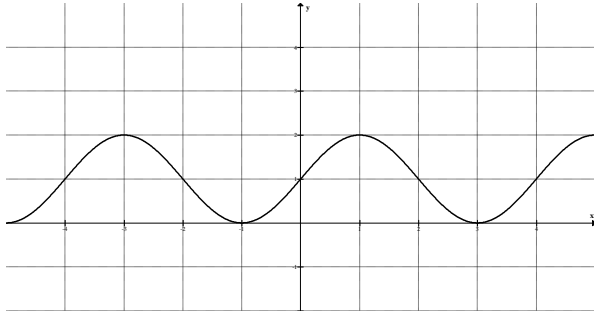
**PreAP PreCalculus**  
**WS – Writing Functions of Sine and Cosine**  
**Spring 2019**

Name \_\_\_\_\_

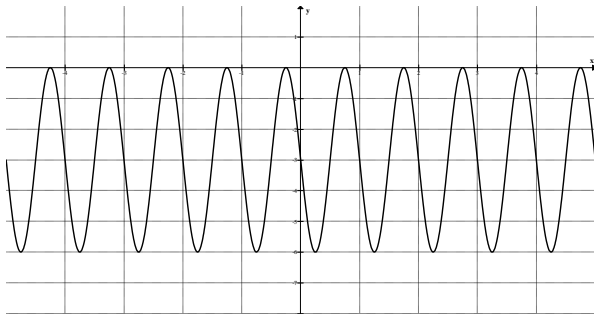
Date \_\_\_\_\_ Per \_\_\_\_\_

Write a sine and cosine function that models the following graph

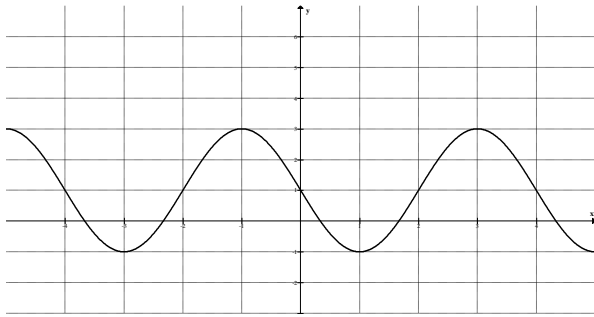
1.



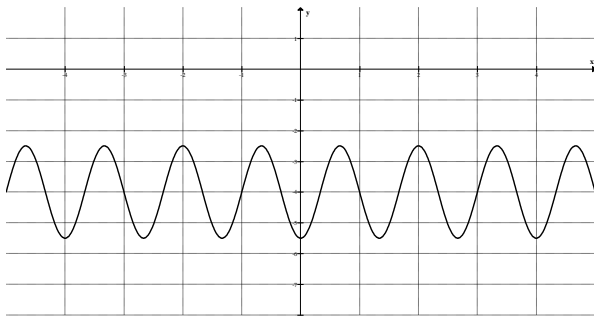
2.



3.



4.



1.

\_\_\_\_\_

\_\_\_\_\_

2.

\_\_\_\_\_

\_\_\_\_\_

3.

\_\_\_\_\_

\_\_\_\_\_

4.

\_\_\_\_\_

\_\_\_\_\_